

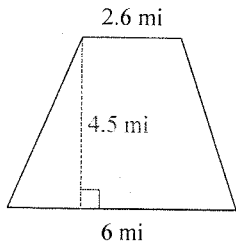
Assignment

Name _____

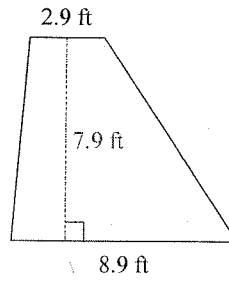
Date _____ Period _____

Find the area of each.

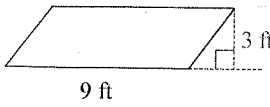
1)



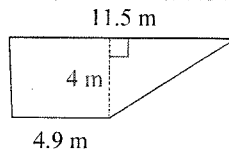
2)



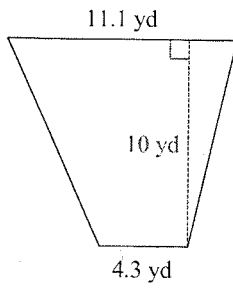
3)



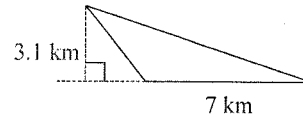
4)



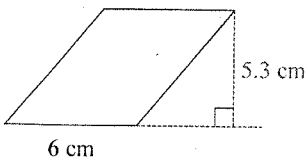
5)



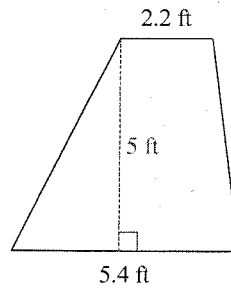
6)



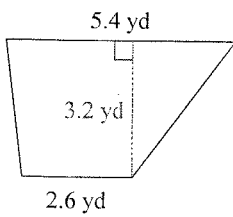
7)



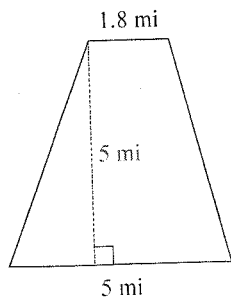
8)



9)



10)



Answers to Assignment (ID: 1)

1) 19.35 mi^2

5) 77 yd^2

9) 12.8 yd^2

2) 46.61 ft^2

6) 10.85 km^2

10) 17 mi^2

3) 27 ft^2

7) 31.8 cm^2

4) 32.8 m^2

8) 19 ft^2